




Mick

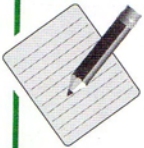


Sam



Pan fydd **Mick** ar **20**, ble mae Sam?

Pan fydd **Sam** ar **14**, ble mae Mick?




Mae Mick a Sam yn dechrau eto.

Maen nhw'n penderfynu rasio.


Rwy'n dechrau ar **0**

Dwyt ti ddim yn neidio
mor bell felly gei di
ddechrau ar **50**



Pwy sy'n cyrraedd **100** gyntaf?

Dangoswch sut rydych chi'n ei gyfrifo.























3m

CYFANSWM




6m


2 Mae pob llun yn cynrychioli rhif.

				Cyfanswm y rhes
				20
				28
				35
				46
				?


Beth yw cyfanswm y rhes olaf?



3



pecyn mawr, **5** pen



pecyn bach, **3** phen

Rhowch ddwy ffordd **wahanol** o brynu **34** pen yn union.

pecyn mawr a

pecyn bach

neu

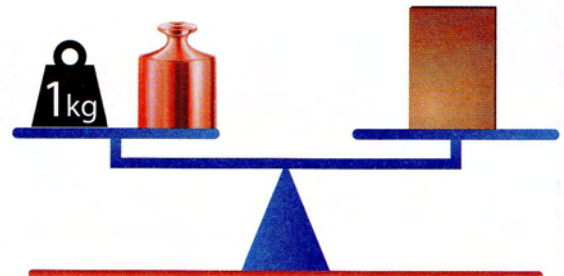

pecyn mawr a

pecyn bach

2m

4

Mae'r ddwy glorian yn gytbwys.




Faint mae  yn ei bwyso?

2m

7m


5

Mae Anna'n defnyddio tinsel coch i addurno teils drych sgwâr.




Mae wedi'i wneud o **4** teilsen.

Mae'n rhoi **80cm** o dinsel coch o amgylch y perimedr.



Mae wedi'i wneud o **15** teilsen.

Faint o gentimetrau o dinsel coch mae'n eu rhoi o amgylch y perimedr?



cm

6

Cafodd y medalau ar gyfer Gemau Olympaidd 2012 eu gwneud yng Nghymru.

Medal aur

Wedi'i gwneud o:

- 6 gram o aur
- 370 gram o arian
- 24 gram o gopr.



Medal arian

Wedi'i gwneud o:


- 370 gram o arian
- 30 gram o gopr.



	Aur	Arian	Copr
Cost un gram	£36.50	£0.63	£0.01

Roedd medal aur yn costio **mwya** i'w gwneud na medal arian.

Faint yn fwy?



£ yn fwy

4m

CYFANSWM

7m